

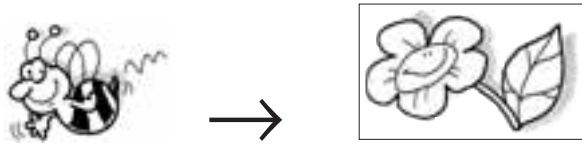


UGUALE

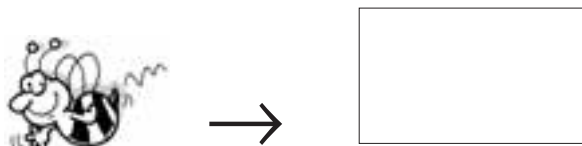
- ① - Disegna seguendo le indicazioni della freccia e completa.


• LA FRECCIA DICE: VOLA SUL... →

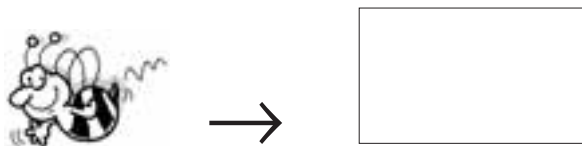
• DISEGNA TANTI  QUANTE SONO LE 



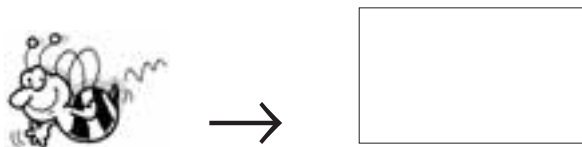
LE  SONO



I  SONO



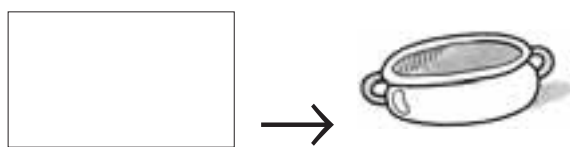
OGNI  HA IL
SUO  ? SÌ NO



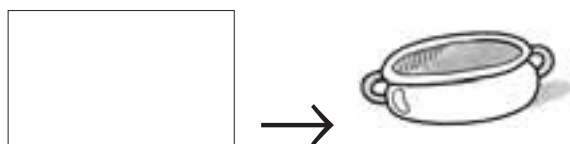
PERCHÉ...

• LA FRECCIA DICE: È SULLA... →

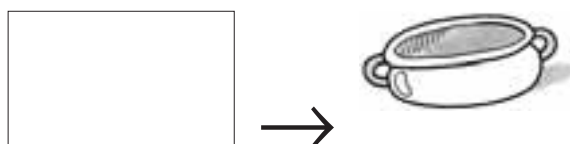
• DISEGNA TANTI  QUANTE SONO LE 



I  SONO



LE  SONO



OGNI  HA IL
SUO  ? SÌ NO
PERCHÉ...