



nome

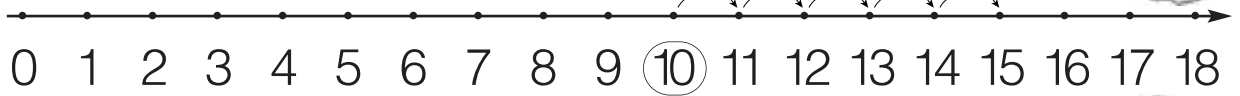
classe

data

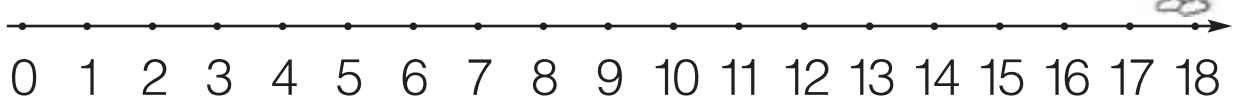
L'addizione sulla linea dei numeri/3

1 Esegui le addizioni sulla linea dei numeri, come vedi nell'esempio, e registra i risultati nelle caselle.

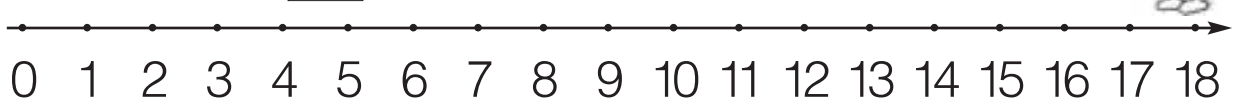
• $10 + 5 =$



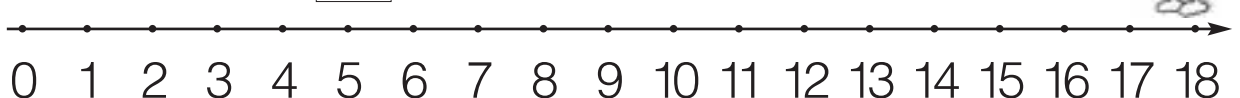
• $7 + 7 =$



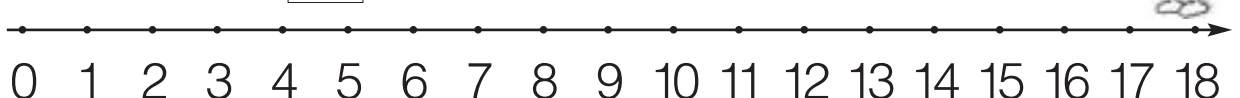
• $8 + 4 =$



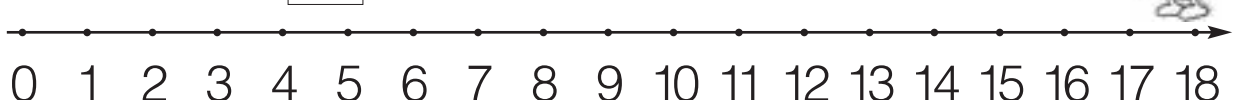
• $15 + 0 =$



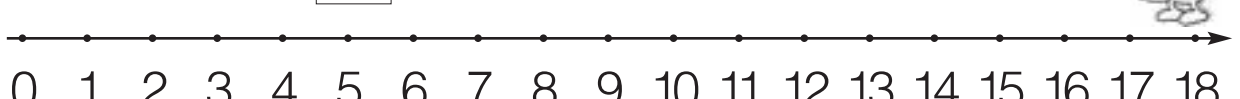
• $6 + 5 =$



• $5 + 9 =$



• $0 + 18 =$



• $8 + 8 =$

