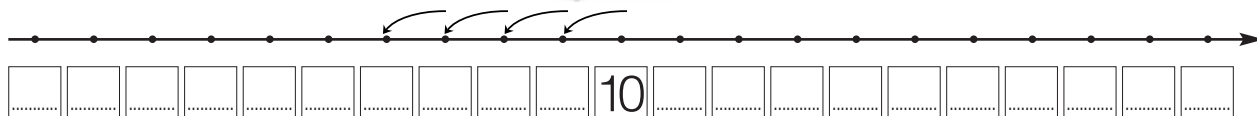


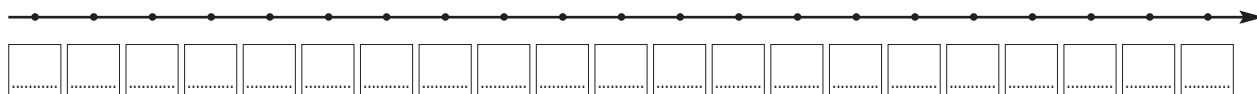
# La sottrazione sulla linea dei numeri/2



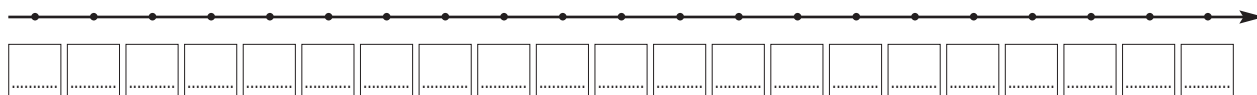
- 1 - Osserva, completa le linee dei numeri ed esegui, come nell'esempio.



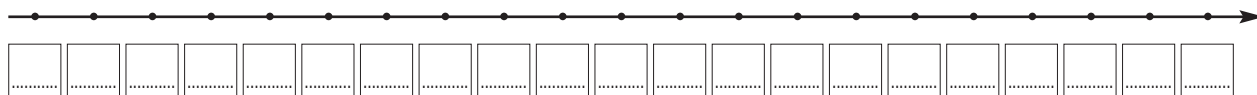
$$\boxed{10} - \boxed{4} = \boxed{\dots\dots\dots}$$



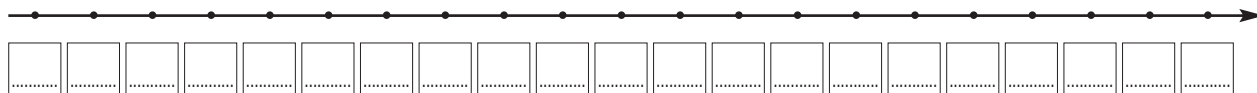
$$\boxed{12} - \boxed{8} = \boxed{\dots\dots\dots}$$



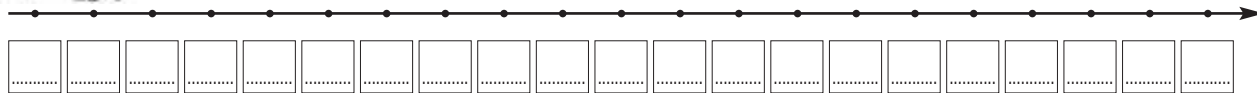
$$\boxed{15} - \boxed{5} = \boxed{\dots\dots\dots}$$



$$\boxed{16} - \boxed{8} = \boxed{\dots\dots\dots}$$



$$\boxed{13} - \boxed{10} = \boxed{\dots\dots\dots}$$



$$\boxed{19} - \boxed{8} = \boxed{\dots\dots\dots}$$